

4. Solving the simple word problems: Try to use proper visualization of the word problems.

a) Patrick had 13 beads, Tom had 5 beads more than Patrick. How many beads did Tom have?

P ○○○○○○○○○○○○○○

T ○○○○○○○○○○○○○○○○○○ $13 + 5 = 18$

Tom had 18 beads.

b) Try to think up tasks for the following pictures:

• P ○○○○○○○○○○○○○○○○○○

T ○○○○○○○○○○○○○○

Patrick and Tom ~~both~~ baked cookies. Patrick baked 18 cookies. Tom baked 5 less than Patrick. How many cookies did Tom bake?

$$18 - 5 = 13$$

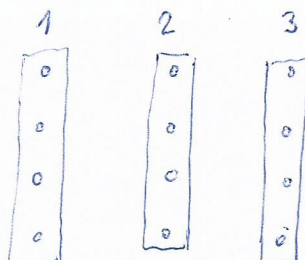
• P ○○○○○○○○○○○○○○○○○○

T ○○○○○○○○○○○○○○○○○○

Patrick and Tom baked both of them 18 cookies. Tom ate 5. How many cookies does have Tom?

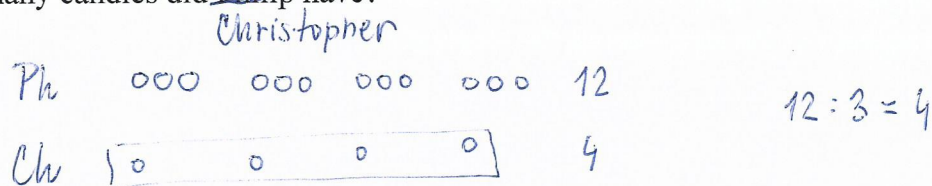
$$18 - 5 = 13$$

c) Grandma had 12 candies and gave it out to three children evenly. How many candies did each child receive?



$$12 : 3 = 4$$

- d) Philip had 12 candies, Christopher had three times less candies than Philip. How many candies did ~~Philip~~ have?

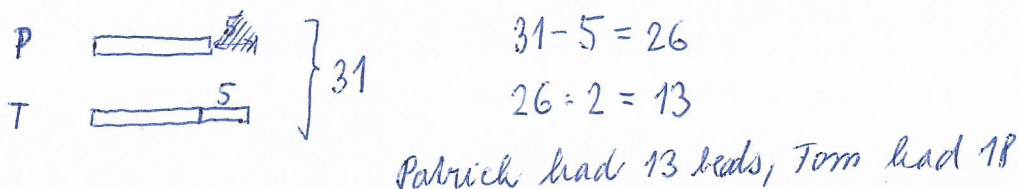


Composed word problems

- e) Patrick had 13 beads, Tom had 5 more beads than Patrick. How many beads did they have together?




- f) Patrick had 5 beads less than Tom, together with Tom they had 31 beads. How many beads did Tom have?



T-F test: $18 - 13 = 5 \checkmark$ $13 + 18 = 31 \checkmark$

- g) Mark and Therese together saved 250 crowns. Therese saved 50 crowns more than Mark. How many crowns did each of them save?

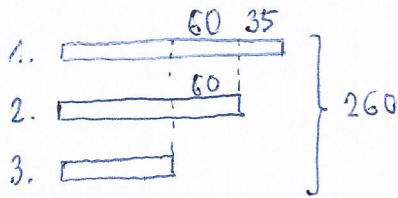


Mark saved 100 Kč and Therese saved 150 Kč. T-F: $150 - 100 = 50 \checkmark$
 $100 + 150 = 250 \checkmark$

Frequent mistake: $250 : 2 = 125$ $125 - 50 = 75$ $125 + 50 = 175$

T-F test: $175 + 75 = 250 \checkmark$

- h) There were 260 t of sand on three piles. On the first pile there were 35 t of sand more than on the second pile. On the third pile there were 60 t less than on the second pile. What amount of the sand was on the single piles?



$$260 - 60 - 35 = 200 - 35 = 165 \quad 200 - 95 = 105$$


$$105 - 3 = 85 \quad 35$$

$$3: 55 \text{ t}, \quad 2: 145 \text{ t}, \quad 3: 130 \text{ t}$$

T-F *Ans*: ~~55 + 145 + 140 =~~ $35 + 95 + 130 = 260 \checkmark$ $130 - 95 = 35 \checkmark$
 $95 - 35 = 60 \checkmark$

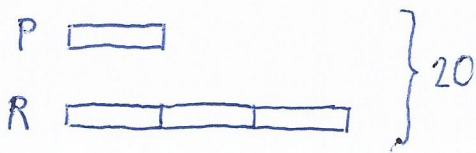
Word problems with distractor

5. Try to use proper visualization of the following word task with distractor:
- a) Roman has 15 cars, and that is three times more than Peter has. How many cars does Peter have?



P $15 : 3 = 5$

- b) Together, Roman and Peter have 20 cars. Peter has three times less cars than Roman. How many cars does each of the boys have?



$$20 : 4 = 5$$

$$P : 5$$

$$R : 15$$