

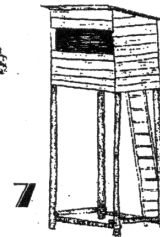
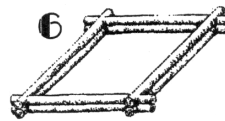
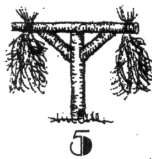
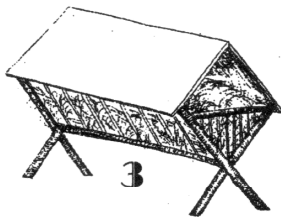
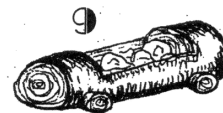


# MYSLIVECKÁ ZAŘÍZENÍ

Napiš jak se jednotlivá myslivecká zařízení jmenují a jakému živočichu slouží.



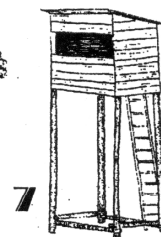
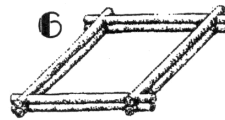
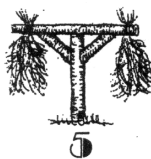
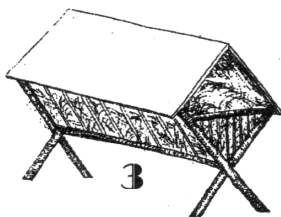


	název	živočich
1		
2		
3		
4		
5		
6		
7		
8		
9		



# MYSLIVECKÁ ZAŘÍZENÍ

Napiš jak se jednotlivá myslivecká zařízení jmenují a jakému živočichu slouží.



	název	živočich
1		
2		
3		
4		
5		
6		
7		
8		
9		

