



I. 数字を書きなさい。



例  
ex. 52

1 \_\_\_\_\_

6 \_\_\_\_\_

2 \_\_\_\_\_

7 \_\_\_\_\_

3 \_\_\_\_\_

8 \_\_\_\_\_

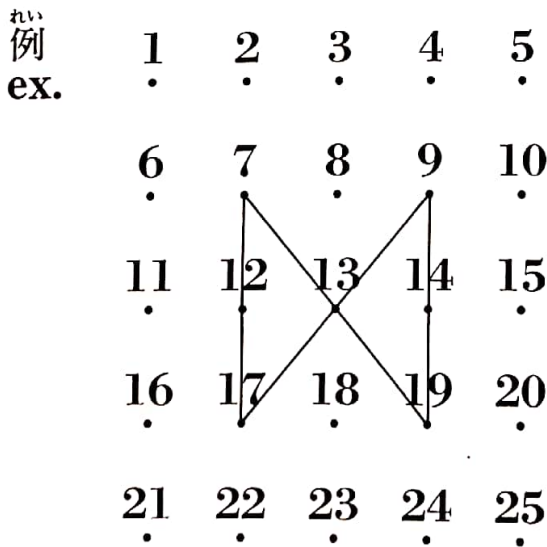
4 \_\_\_\_\_



9 \_\_\_\_\_



5 \_\_\_\_\_


10 \_\_\_\_\_

II-1. 数字を線でつなぎなさい。








<b>A</b>	1	2	3	4	5	<b>B</b>	1	3	5	7	9
	6	7	8	9	10		11	13	15	17	19
	11	12	13	14	15		21	23	25	27	29
	16	17	18	19	20		31	33	35	37	39
	21	22	23	24	25		41	43	45	47	49

<b>C</b>	100	150	200	250	300	<b>D</b>	100	150	200	250	300
	350	400	450	500	550		350	400	450	500	550
	600	650	700	750	800		600	650	700	750	800
	850	900	950	1000	1050		850	900	950	1000	1050
	1100	1150	1200	1250	1300		1100	1150	1200	1250	1300

II-2. <sup>なんばん</sup>何番ですか。 

例 03-3299-2011  
ex. \_\_\_\_\_

-  1 \_\_\_\_\_
-  2 \_\_\_\_\_
-  3 \_\_\_\_\_
-  4 \_\_\_\_\_
-  5 \_\_\_\_\_



I. いくらですか。


例  
ex.



( 500 円)



1



( 円)

2




( 円)

3




( 円)

4




( 円)

5




( 円)

6




( 円)

7




( 円)

8



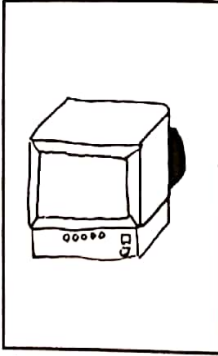
( 円)

9





( 円)

10





( 円)


II-1. <sup>ばんごう</sup>番号を書きなさい。




れい  
例  
ex.



II-2. いくらですか。



(            円)



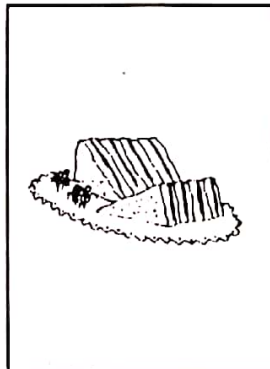
(            円)




れい  
例  
ex.    250 円)



(            円)



(            円)



(            円)